

Phonics/Spelling

Login to Phonics Play and play a game (Free access using the username march20 and password home).

<https://new.phonicsplay.co.uk/resources>

Ask your child to spell the Common Exception words in a fun way using this online game, 'Spooky Spelling'.

<http://www.ictgames.com/mobilePage/spookySpellings/index.html>

Can you practise reading flashcards on the game Flashcards speed trial:

<https://www.phonicsplay.co.uk/resources/phase/3/flashcards-speed-trials>

English

Read 'The Lighthouse Keeper's Lunch'

You will find it here:

<https://www.youtube.com/watch?v=46wCRq50Wwg>

- Draw a story map for the story to show all the main things that happen.
- Rewrite the story in your own words. You can do a few sentences at a time. Use your story map to help and use your phonics to help with sounding out.

Someone could tell you the sentence and you could have a go at writing it.

Maths This week for maths we will be looking at Fractions. Children need to recognise, find and name a half as one of two equal parts of an object, shape or quantity. Recognise, find and name a quarter as one of four equal parts of an object, shape or quantity. <https://whiterosemaths.com/homelearning/year-1/> if you click on Week 11 you can watch the lesson videos that will go through these objectives.

Find half of each amount.



Find half of the amounts and complete the stem sentences.



There are ___ beads.

Half of ___ is ___

There are ___ marbles.

Half of ___ is ___

Find half of the sheep.



There are ___ sheep.

Half of ___ is ___

Share each quantity into four equal groups.



There are ___ cakes.

There is ___ cake in each quarter.

A quarter of ___ is ___



There are ___ sweets.

There are ___ sweets in each quarter.

A quarter of ___ is ___



There are ___ peaches.

There are ___ peaches in each quarter.

A quarter of ___ is ___

Use a range of containers and rice/water. Can you show me a quarter full in each container? Do they look the same or different?

Use counters to complete the sentences.

A quarter of 4 is ___

A quarter of 8 is ___

1 is one quarter of ___

3 is one quarter of ___

You can also play on the games below to play fraction games:

<http://www.snappymaths.com/counting/fractions/interactive/halfquartersimm/halfquartersimm.htm>

<https://www.bbc.co.uk/bitesize/topics/z3rbg82/articles/zq2yfrd>

<https://www.topmarks.co.uk/Search.aspx?q=fractions>

Science- Can you draw symbols to show a weather forecast for the UK? Can you tell me about the weather here in the UK. Write a sentence to describe the weather. Use the sheet attached below.

You can also visit this site:

<https://www.bbc.co.uk/bitesize/clips/z9g87ty>

Fun task:


Can you follow the instructions from below to make a kite?

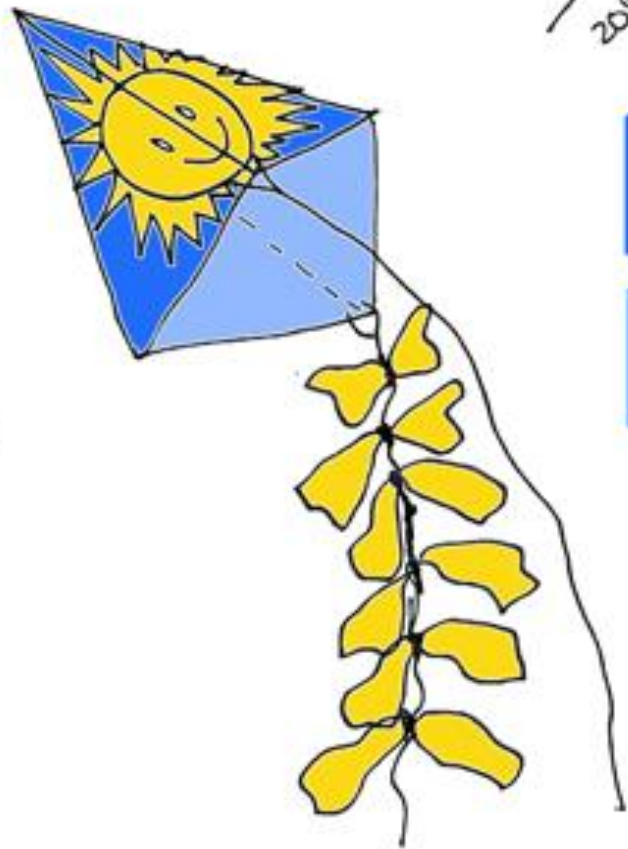
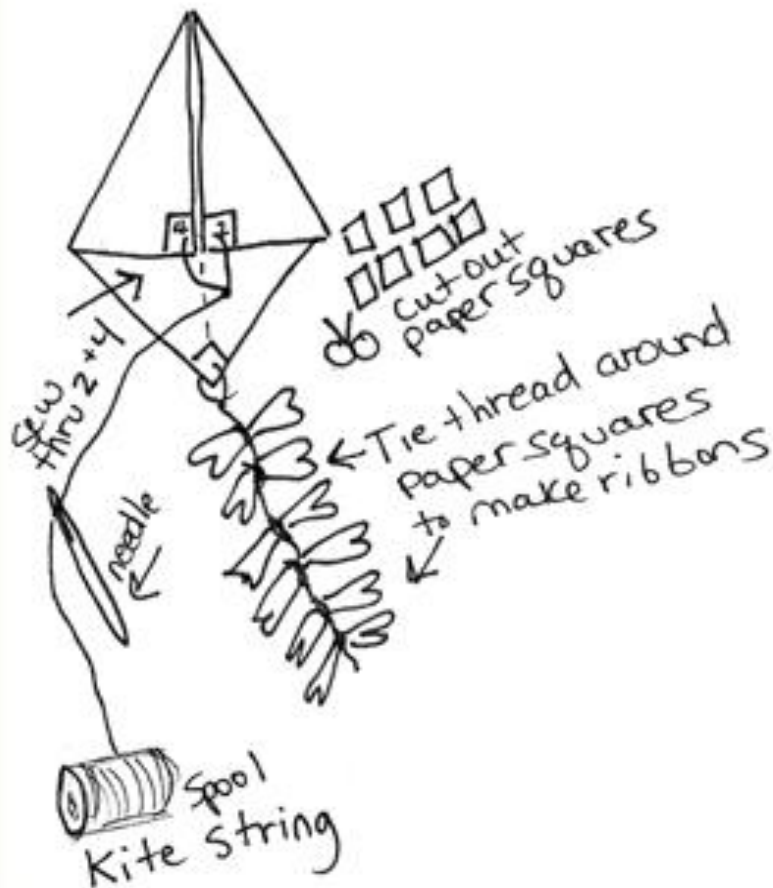
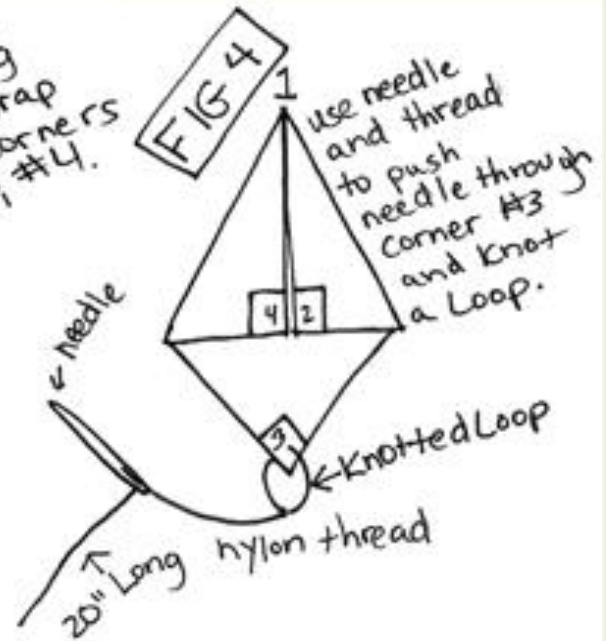
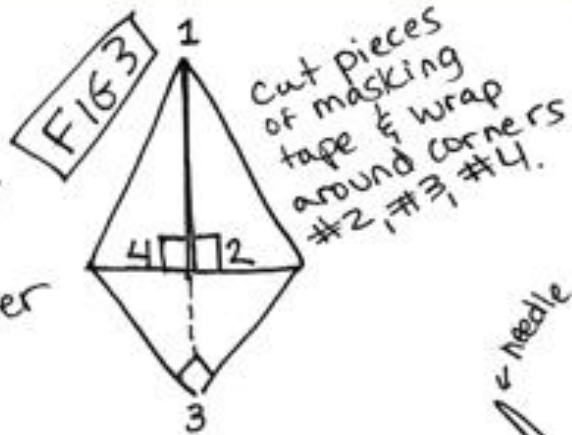
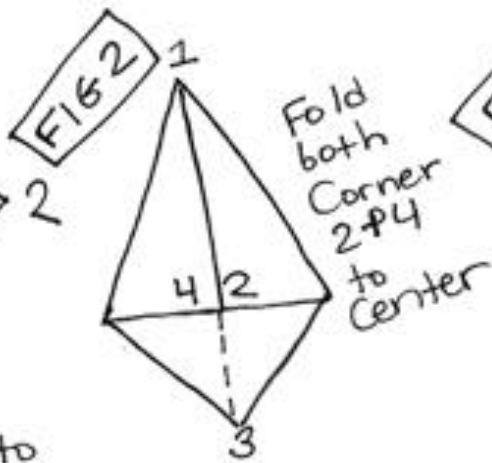
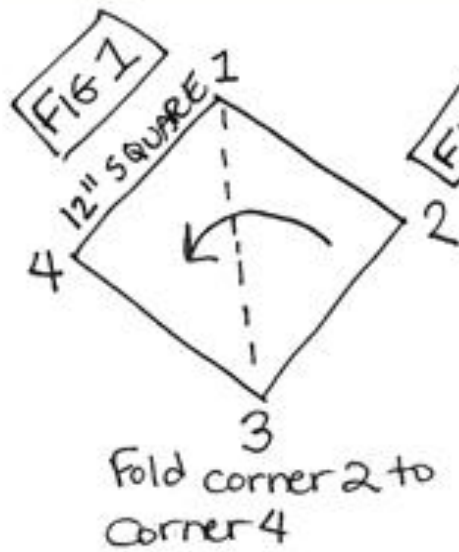
Weather

Draw some symbols to show a weather forecast for the UK:



The forecast: _____





EASY KITES